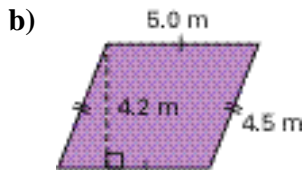
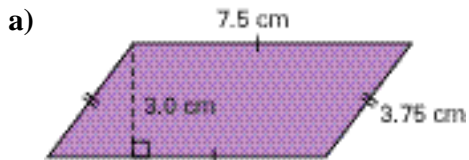
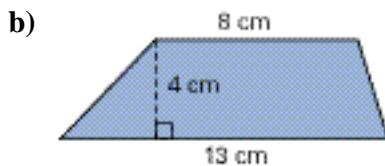
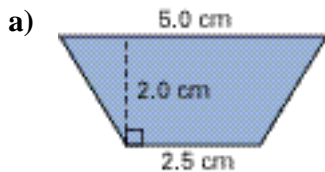


Chapter Self-Test

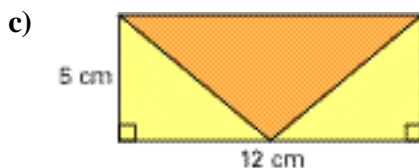
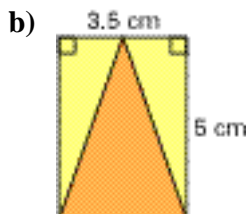
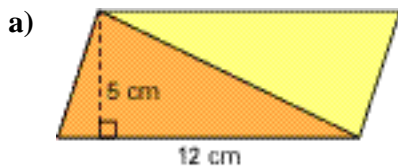
1. Calculate each perimeter and area.



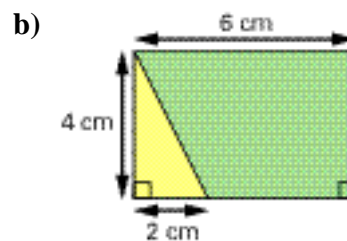
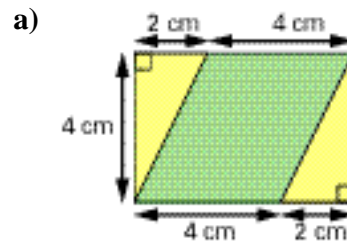
2. Calculate the area of each trapezoid.



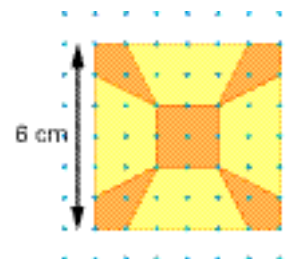
3. Calculate the area of the orange triangle in each parallelogram.



4. Calculate the area of the green shape in each rectangle.



5. What area of the large square is orange? Explain what you did.



6. Asha is redecorating the room shown below.

- What area of carpet does she need to cover the floor? Explain your solution.
- What is the perimeter of the room?

